

Battle of the Boyne Visitor Centre

Suitable for Primary School Level

Part 1

Workbook for use at
Visitor Centre



Entrance Hall

Looking at the panels on the walls, answer the following questions

Question 1 :

In what year was the Battle of the Boyne fought ?

(Please circle the correct answer)

1590

1690

1790

The Night Before the Battle Room

Question 2 :

How many men fought with the Jacobite army ?

(Please tick the correct box)

24,000

10,000


Question 3 :

How many men fought with the Williamite army ?

(Please tick the correct box)

36,000

15,000



Model Room

Question 4 :

What is the name of the river in the painting ?

(Please circle the correct answer)

Boyne

Liffey

Lee

Laser Display

Question 5 :

How many men lost their lives in the Battle of the Boyne ?

(Please tick the correct box)

1,500

3,000

Stable Yard

Question 6 :


How many gun powder barrels can you count on the powder wagon ?

(Please tick the correct box)


10

11

13



The Stable Yard



Question 7 :

Look inside the horse stable. Circle the words for the objects you can see inside

Saddle Bicycle Pitchfork Broom Fishtank

Cannon Television Bucket Sacks of Grain

Audio Visual

Congratulations ! You are now at the end of our exhibition and have watched our audio visual display on the battle.

Question 8 :

Who won the battle ?

(Please tick the correct box)

James II

William III

