


# Battle of the Boyne Visitor Centre

Suitable for Secondary School Level

## Part 1

Workbook for use at  
Visitor Centre



# Entrance Hall

*Looking at the panels on the walls, answer the following questions*

## Question 1 :

In what year was the Battle of the Boyne fought ?

(Please circle the correct answer)

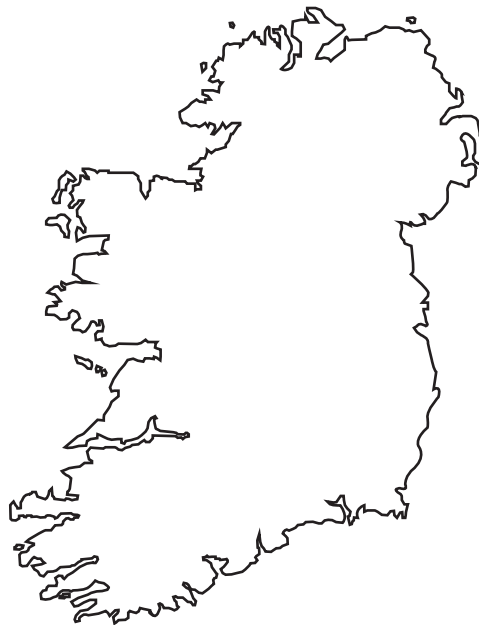
1590

1690

1790

## Question 2 :

Label the map to show the towns and counties where both kings landed in Ireland.



## Question 3 :

Name the 3 Kings who were involved in the Battle of the Boyne

a. \_\_\_\_\_

b. \_\_\_\_\_


c. \_\_\_\_\_



# The Night Before the Battle Room

Looking at the panels on the walls, answer the following questions

## Question 4 :



\_\_ ac \_\_ \_\_ \_\_ † \_\_ was the name given to a soldier on James's side.

## Question 5 :

How many men fought with the Jacobite army ? (Please tick the correct box )

24,000

☐

36,000

☐

60,000

☐

## Question 6 :

The Duke of \_\_\_\_\_ was the Captain General of the Jacobite army.

(Please circle the correct answer )

Tyrconnell

Strongbow

Louis XIV

Brian Boru

## Question 7:

Mounted Infantrymen were called **GRANOSOD** ( Please unscramble the word )

\_\_\_\_\_

## Question 8 :

Name 3 types of weapons that were used on the day of the battle.

a \_\_\_\_\_

b \_\_\_\_\_

c \_\_\_\_\_

## Question 9 :

How many men fought with the Williamite army ? (Please tick the correct box )

24,000

☐

36,000

☐

60,000

☐

# Model Room

Looking at the large painting of the Battle of the Boyne ,  
answer the following questions :

## Question 8 :

a : How many cannons can you count in the painting ?

\_\_\_\_\_

b : What animals can you see in the painting ?

\_\_\_\_\_

c : Name the river in the painting ?


\_\_\_\_\_

## Laser Display


## Question 9 :

How many men lost their lives in the Battle of the Boyne ?

\_\_\_\_\_



# The Stable Yard



Read the information panel on display and answer the following questions

Question 14 :

What is the maximum range of the Saker Cannon ?

\_\_\_\_\_


Question 15 :

List 3 items that you can see in the horses stable

1 : \_\_\_\_\_

2 : \_\_\_\_\_

3 : \_\_\_\_\_



Question 16 :

This short barrel weapon fired large solid shot, stones, bombs/ incendiaries.


(Please circle the correct answer )

Cart

Field Mortar

Tripod/Gin

Wheelbarrow



# Audio Visual

Congratulations ! You are now at the end of our exhibition and have watched our audio visual display on the battle.

## Question 17 :

How many men lost their lives at the Battle of the Boyne ?

(Please circle the correct answer )

400

5000


2000

1500

## Question 18 :

Who won the battle ?

\_\_\_\_\_



*Battle of the Boyne*  
1690

